
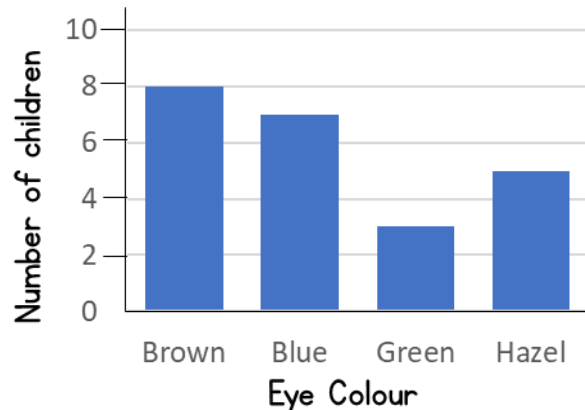

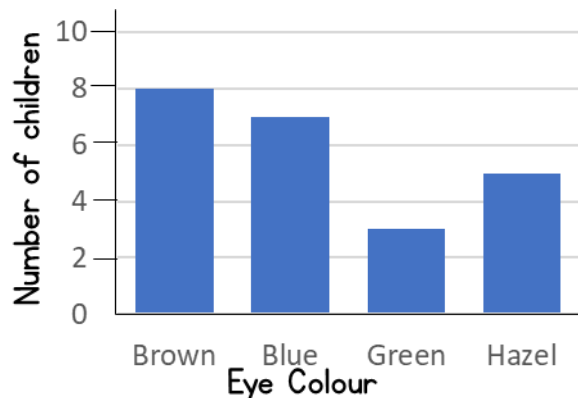


- 1) How many more children have brown eyes than green?



- 2) What is 50p more than £3 and 65p?
- 3) Divide 72 by 4
- 4) Write 572 in words.


1) How many children have blue or hazel eyes?



2) One 😊 represents 8 people.
How many 😊 represent 40 people?

3) Calculate £4 and 78p – £2 and 67p

4) What is 30×4 ?



1) Which clubs does Tim go to?

	Sam	Beth	Tim	Jane	Paul
Art Club	✓		✓	✓	
Chess Club	✓	✓			✓
Cooking Club		✓	✓		✓


2) Write 14 in tally marks.

3) Subtract 75p from £4 and 16p

4) What is 100 more than 382?

1) Which children go to Chess and Cooking Club?

	Sam	Beth	Tim	Jane	Paul
Art Club	✓		✓	✓	
Chess Club	✓	✓			✓
Cooking Club		✓	✓		✓



2) Hannah buys a comic for £3 and 75p


How much change does she get from a £10 note?

3) What is 32 divided by 8?

4) Which is greater, 345 or 354?

- 1) Find the difference between the number of visitors on Wednesday and Friday.

Day	Number of visitors
Wednesday	132
Thursday	194
Friday	321



- 2) Alex has a £20 note. She buys a purse for £12 and 49p. How much change does she receive?
- 3) What is 320 divided by 8?
- 4) Partition the number 492