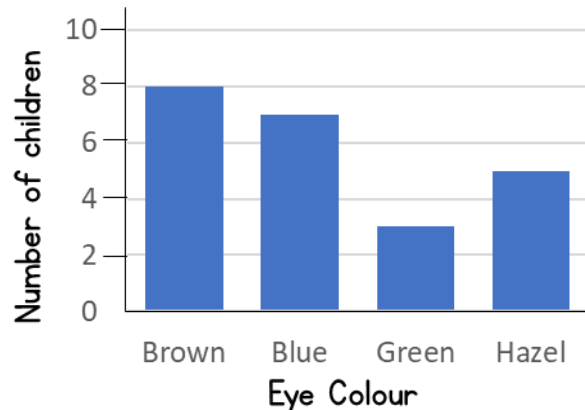



1) How many more children have brown eyes than green?



5 more children

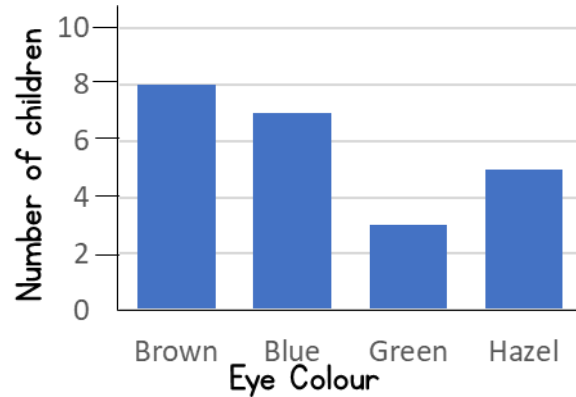


2) What is 50p more than £3 and 65p? £4 and 15p


3) Divide 72 by 4 18

4) Write 572 in words. Five hundred and seventy-two

1) How many children have blue or hazel eyes?



12 children



2) One 😊 represents 8 people.  
How many 😊 represent 40 people?

5


3) Calculate £4 and 78p — £2 and 67p

£2 and 11p

4) What is  $30 \times 4$ ? 120

1) Which clubs does Tim go to?

	Sam	Beth	Tim	Jane	Paul
Art Club	✓		✓	✓	
Chess Club	✓	✓			✓
Cooking Club		✓	✓		✓



Art and Cooking


2) Write 14 in tally marks. ~~||||~~ ~~||||~~ ||||

3) Subtract 75p from £4 and 16p **£3 and 41p**

4) What is 100 more than 382? **482**

1) Which children go to Chess and Cooking Club?

	Sam	Beth	Tim	Jane	Paul
Art Club	✓		✓	✓	
Chess Club	✓	✓			✓
Cooking Club		✓	✓		✓



Beth and Paul

2) Hannah buys a comic for £3 and 75p

How much change does she get from a £10 note?

£6 and 25p


3) What is 32 divided by 8? 4

4) Which is greater, 345 or 354? 354

- 1) Find the difference between the number of visitors on Wednesday and Friday.

Day	Number of visitors
Wednesday	132
Thursday	194
Friday	321

189 visitors



- 2) Alex has a £20 note. She buys a purse for £12 and 49p. How much change does she receive?

£7 and 51p

- 3) What is 320 divided by 8? 40

- 4) Partition the number 492  $400 + 90 + 2$