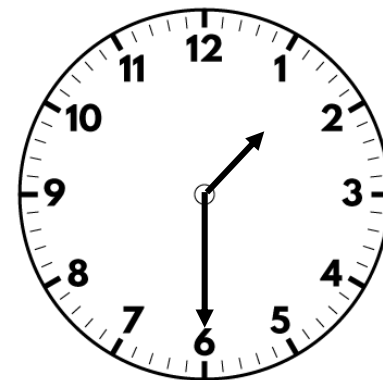


1) How much money is there altogether?





2) Multiply 24 by 2

3) What is 4×12 ?


4) How many points do Class 3 have?


Class	Tally	Total points
Class 3		

1) How many bikes were seen in the morning?

Time	Bikes seen
Morning	
Afternoon	

Key

 = 5 bikes






2) How much money is there altogether?




3) Calculate 24×3

4) What is $345 + 100$?

1) How many animals are there altogether?

Animals	Number in shop
Fish	
Hamsters	
Guinea Pigs	



Key




 = 4 animals


2) Write 548p in pounds and pence.

3) Find the product of 18 and 4

4) What is $345 - 100$?

1) How many more children play football than rugby?

Sport played	Number of children
Football	
Rugby	
Netball	



Key


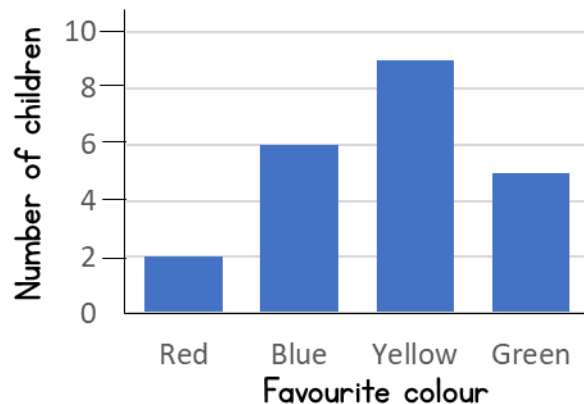
 = 10 children

2) Write 682p in pounds and pence.

3) Divide 48 by 2

4) Find the sum of 342 and 189

1) How many children's favourite colour is green?



2) Find the total of £3 and 25p + £4 and 78p

3) Calculate $84 \div 4$

4) What is the value of the 4 digit in 451?