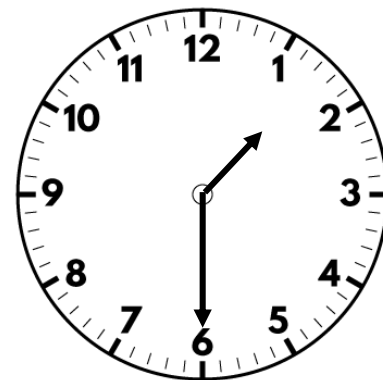


1) How much money is there altogether? **40 p**





2) Multiply 24 by 2 **48**

3) What is 4×12 ? **48**

4) How many points do Class 3 have?


Class	Tally	Total points
Class 3		17


1) How many bikes were seen in the morning?

Time	Bikes seen
Morning	
Afternoon	

20 bikes

Key

 = 5 bikes



2) How much money is there altogether?







£12 and 31 p

3) Calculate 24×3 72

4) What is $345 + 100$? 445

1) How many animals are there altogether? **40**

Animals	Number in shop
Fish	
Hamsters	
Guinea Pigs	



Key




 = 4 animals


2) Write 548p in pounds and pence. **£5 and 48p**

3) Find the product of 18 and 4 **72**

4) What is $345 - 100$? **245**


1) How many more children play football than rugby?

Sport played	Number of children
Football	
Rugby	
Netball	



25

Key

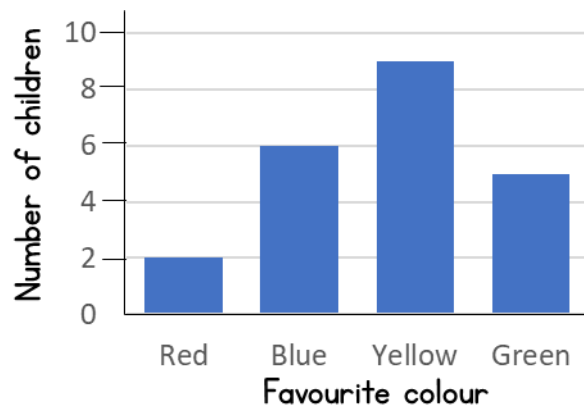
 = 10 children

2) Write 682p in pounds and pence. £6 and 82p


3) Divide 48 by 2 24

4) Find the sum of 342 and 189 531

1) How many children's favourite colour is green?



5 children



2) Find the total of £3 and 25p + £4 and 78p **£8 and 3p**

3) Calculate $84 \div 4$ **21**

4) What is the value of the 4 digit in 451? **400 or 4 hundreds**